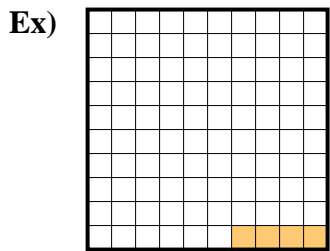
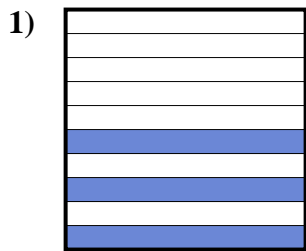




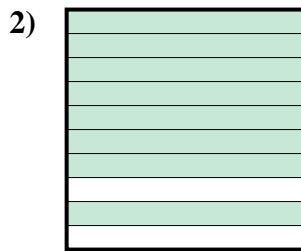
Determine the value written as a fraction , decimal & a percent.




fraction  $\frac{4}{100}$   
 decimal 0.04  
 percent 4



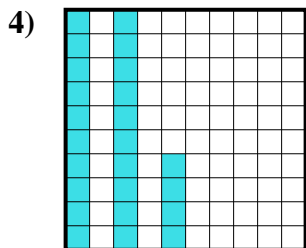
fraction \_\_\_\_\_  
 decimal \_\_\_\_\_  
 percent \_\_\_\_\_



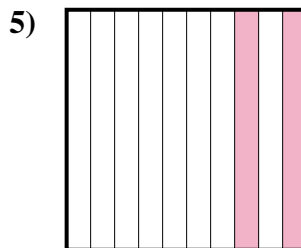
fraction \_\_\_\_\_  
 decimal \_\_\_\_\_  
 percent \_\_\_\_\_



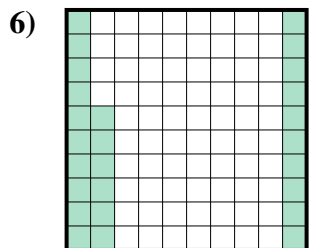
fraction \_\_\_\_\_  
 decimal \_\_\_\_\_  
 percent \_\_\_\_\_



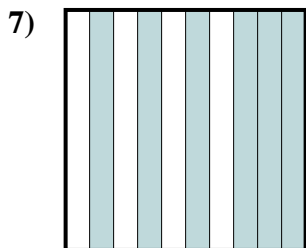
fraction \_\_\_\_\_  
 decimal \_\_\_\_\_  
 percent \_\_\_\_\_



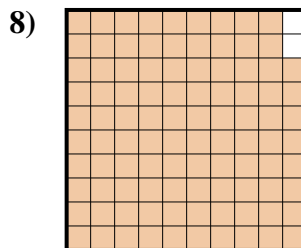
fraction \_\_\_\_\_  
 decimal \_\_\_\_\_  
 percent \_\_\_\_\_



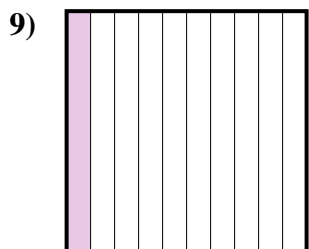
fraction \_\_\_\_\_  
 decimal \_\_\_\_\_  
 percent \_\_\_\_\_



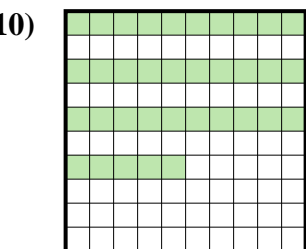
fraction \_\_\_\_\_  
 decimal \_\_\_\_\_  
 percent \_\_\_\_\_



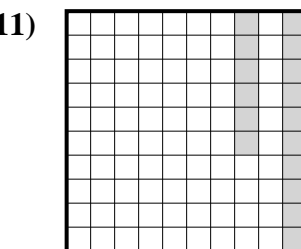
fraction \_\_\_\_\_  
 decimal \_\_\_\_\_  
 percent \_\_\_\_\_



fraction \_\_\_\_\_  
 decimal \_\_\_\_\_  
 percent \_\_\_\_\_



fraction \_\_\_\_\_  
 decimal \_\_\_\_\_  
 percent \_\_\_\_\_



fraction \_\_\_\_\_  
 decimal \_\_\_\_\_  
 percent \_\_\_\_\_

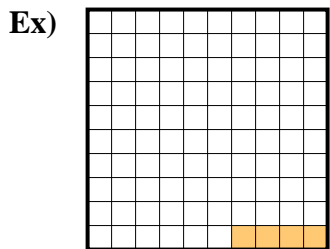
**Answers**

Ex.  $\frac{4}{100}$  0.04 4%


- 1. \_\_\_\_\_
- 2. \_\_\_\_\_
- 3. \_\_\_\_\_
- 4. \_\_\_\_\_
- 5. \_\_\_\_\_
- 6. \_\_\_\_\_
- 7. \_\_\_\_\_
- 8. \_\_\_\_\_
- 9. \_\_\_\_\_
- 10. \_\_\_\_\_
- 11. \_\_\_\_\_



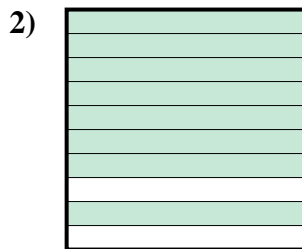
Determine the value written as a fraction , decimal & a percent.




fraction  $\frac{4}{100}$   
 decimal  $0.04$   
 percent  $4$



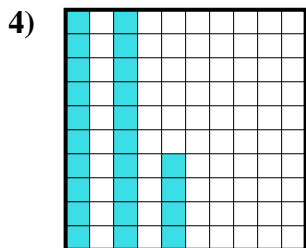
fraction  $\frac{3}{10}$   
 decimal  $0.3$   
 percent  $30$



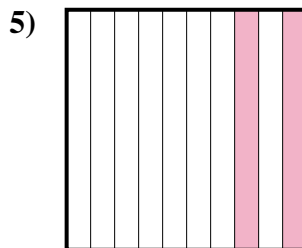
fraction  $\frac{8}{10}$   
 decimal  $0.8$   
 percent  $80$



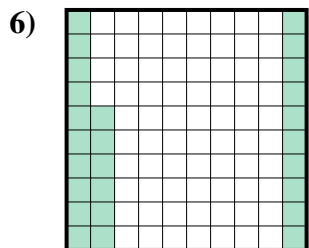
fraction  $\frac{7}{10}$   
 decimal  $0.7$   
 percent  $70$



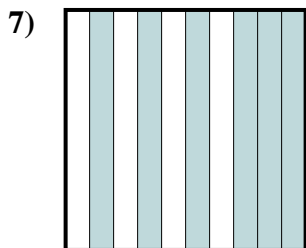
fraction  $\frac{24}{100}$   
 decimal  $0.24$   
 percent  $24$



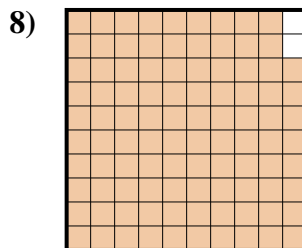
fraction  $\frac{2}{10}$   
 decimal  $0.2$   
 percent  $20$



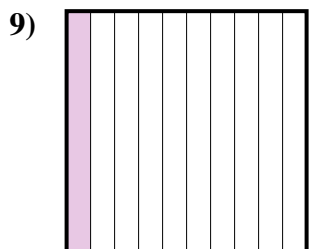
fraction  $\frac{26}{100}$   
 decimal  $0.26$   
 percent  $26$



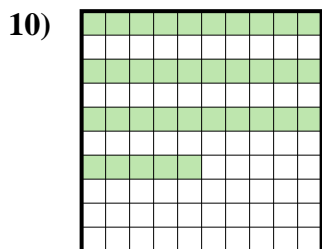
fraction  $\frac{6}{10}$   
 decimal  $0.6$   
 percent  $60$



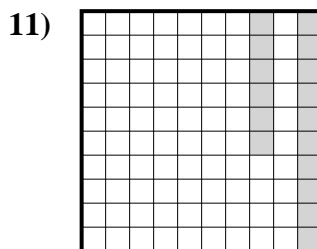
fraction  $\frac{98}{100}$   
 decimal  $0.98$   
 percent  $98$



fraction  $\frac{1}{10}$   
 decimal  $0.1$   
 percent  $10$



fraction  $\frac{35}{100}$   
 decimal  $0.35$   
 percent  $35$



fraction  $\frac{16}{100}$   
 decimal  $0.16$   
 percent  $16$

**Answers**

Ex.	$\frac{4}{100}$	<b>0.04</b>	<b>4%</b>
1.	$\frac{3}{10}$	<b>0.3</b>	<b>30%</b>
2.	$\frac{8}{10}$	<b>0.8</b>	<b>80%</b>
3.	$\frac{7}{10}$	<b>0.7</b>	<b>70%</b>
4.	$\frac{24}{100}$	<b>0.24</b>	<b>24%</b>
5.	$\frac{2}{10}$	<b>0.2</b>	<b>20%</b>
6.	$\frac{26}{100}$	<b>0.26</b>	<b>26%</b>
7.	$\frac{6}{10}$	<b>0.6</b>	<b>60%</b>
8.	$\frac{98}{100}$	<b>0.98</b>	<b>98%</b>
9.	$\frac{1}{10}$	<b>0.1</b>	<b>10%</b>
10.	$\frac{35}{100}$	<b>0.35</b>	<b>35%</b>
11.	$\frac{16}{100}$	<b>0.16</b>	<b>16%</b>